



EJA - ENSINO DE JOVENS E ADULTOS
SIBILA PARISOTTO

Treze Tílias, de de 2020.

Diretora: Nelceni Surdi.


Professora: Fabiana Barbosa

Aluno(a).....


- SEGUIE ATIVIDADES PARA SEMANA DE "ISOLAMENTO SOCIAL" (02 a 06 DE NOVEMBRO).
- SEGUIR ORIENTAÇÕES PASSADAS PELA PROFESSORA.
- NÃO ESQUECER DE COLOCAR A DATA.
- BONS ESTUDOS!

1- SIGA O EXEMPLO. COMPLETE OS DESENHOS DE ACORDO COM AS MULTIPLICAÇÕES.

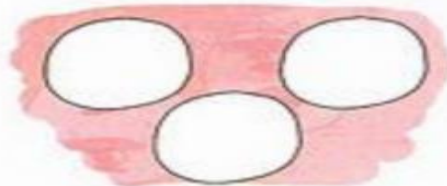
$$2 \times 5 = 10$$



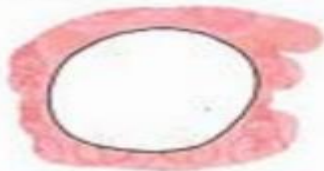
A) $2 \times 4 = 8$



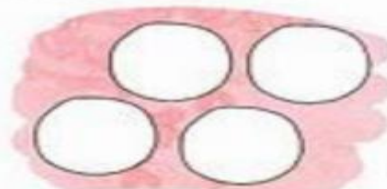
D) $3 \times 4 = 12$




B) $1 \times 7 = 7$



E) $4 \times 2 = 8$



C) $5 \times 1 = 5$



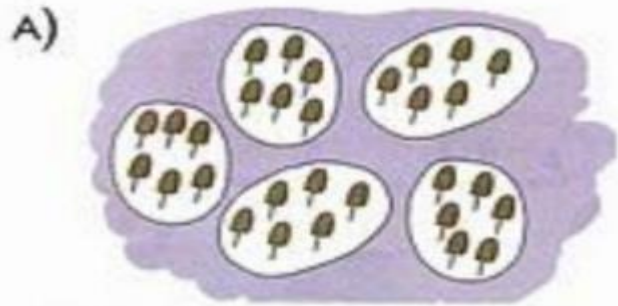
G) $3 \times 2 = 6$



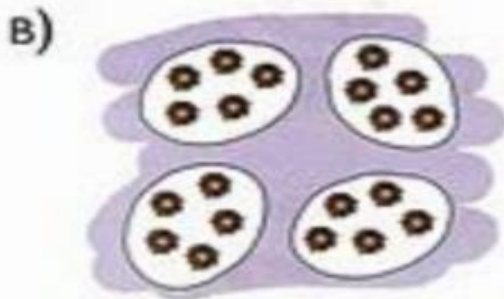
2- ESCREVA O RESULTADO CONFORME O EXEMPLO.



$$3 \times 2 = 6$$




$$5 \times 6 = \underline{\hspace{2cm}}$$



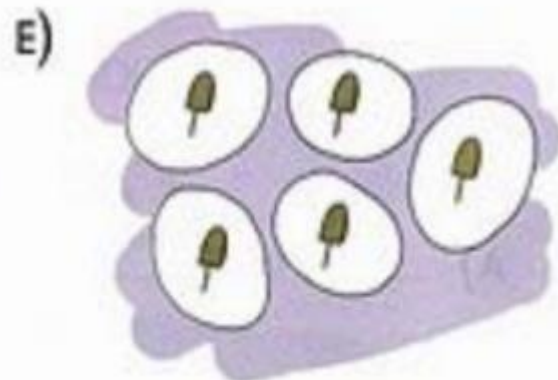
$$4 \times 5 = \underline{\hspace{2cm}}$$



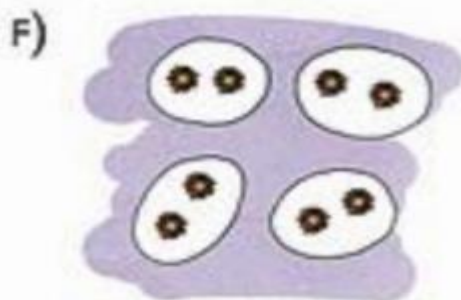
$$1 \times 4 = \underline{\hspace{2cm}}$$




$$2 \times 4 = \underline{\hspace{2cm}}$$



$$5 \times 1 = \underline{\hspace{2cm}}$$



$$4 \times 2 = \underline{\hspace{2cm}}$$



$$2 \times 1 = \underline{\hspace{2cm}}$$